

# SOCIAL STUDIES PLE 2016

## CANDIDATE'S INFORMATION

Index number :

--	--	--	--	--	--	--	--	--

Name :

\_\_\_\_\_

Signature :

\_\_\_\_\_


School name :

\_\_\_\_\_

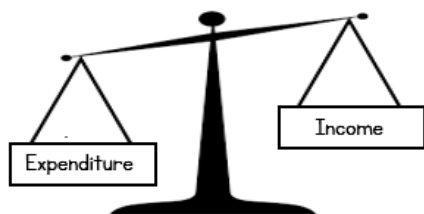
District name :

\_\_\_\_\_

## SECTION A: 40 MARKS

- I. How can road transport across rivers and streams be made possible?  
\_\_\_\_\_
2. What does the black colour on the Uganda National Flag represent?  
\_\_\_\_\_
3. What does the symbol below represent on a map?  
\_\_\_\_\_  

4. Mention the use of a barometer at a weather station.  
\_\_\_\_\_
5. State any one reason why it is important to care for forests.  
\_\_\_\_\_
6. Why is a hut not called a permanent house?  
\_\_\_\_\_
7. State any one way in which peace can be developed among pupils at school.  
\_\_\_\_\_
8. What title is given to a political head of a sub-county in Uganda?  
\_\_\_\_\_
9. What is the use of a compass to a sailor?  
\_\_\_\_\_
10. Mention any one way in which children benefit from United Nations Children's Fund (UNICEF).  
\_\_\_\_\_
- II. State any one way in which people benefit from small scale industries in their area.  
\_\_\_\_\_

12. Give one reason why elections are important in a country.
- 
13. Give any one reason why the British colonialists promoted road construction in Uganda.
- 
14. Why are Ugandans below 18 years not allowed to participate in national elections?
- 
15. Name the continent which is not suitable for human settlement.
- 
16. Name the country that borders Uganda in the East.
- 
17. Name any one river that flows out of Lake Kyoga.
- 
18. How did the Masai make the movement of the early explorers to East Africa difficult?
- 
19. State any one danger of corruption in the economy of a country.
- 
20. What type of budget is represented by the diagram below?
- 



21. Which group of people introduced the idea of salt mining in Uganda?
- 
22. Mention any one way in which drought affect cattle keepers in East Africa.
- 
23. Mention any one factor that makes Common Wealth countries similar.
- 
24. State any one way in which vegetation helps in controlling soil erosion.
- 
25. What term was used to mean the movement of the Dutch settlers from Cape Colony into the interior of South Africa?
- 
26. Mention any one way in which good hotels promote tourism in a country.
-

27. Which African National helped to unite Zanzibar and Tanganyika to Tanzania?  
\_\_\_\_\_
28. Name the type of education which was introduced by the Christian Missionaries in Uganda.  
\_\_\_\_\_
29. Mention any one condition of weather that affects water transport.  
\_\_\_\_\_
30. State any one problem caused by civic wars to a country.  
\_\_\_\_\_
31. Why does the leeward side of mountains receive very little rainfall?  
\_\_\_\_\_
32. Apart from archaeological findings, how else can we get information about the past?  
\_\_\_\_\_
33. State any one way in which a foreigner can become a citizen of Uganda.  
\_\_\_\_\_
34. Name the regional grouping to which Ghana belongs.  
\_\_\_\_\_
35. State any one way in which a farmer can benefit from a commercial bank.  
\_\_\_\_\_

For each of the questions 36-40, answer EITHER the Christian OR the Islamic question but not both. No marks will be awarded to a candidate who attempts both alternatives in a particular number.

36. Either : Give one example of work Jesus Christ was involved in as a child at home.  
\_\_\_\_\_

Or : Give any one example of work Prophet Muhammed (PBUH) got involved in as a child at home.  
\_\_\_\_\_

37. Either : Name any one of God's promises to faithful Christians.  
\_\_\_\_\_

Or : Name any one of Allah's promises to faithful Muslims.  
\_\_\_\_\_

38. Either : Mention the father of Joseph who was sold to Egypt according to the Bible.  
\_\_\_\_\_

Or : Who was the father of Prophet Yusuf according to the Qur'an?  
\_\_\_\_\_

39. Either : What is Sin according to Christianity?

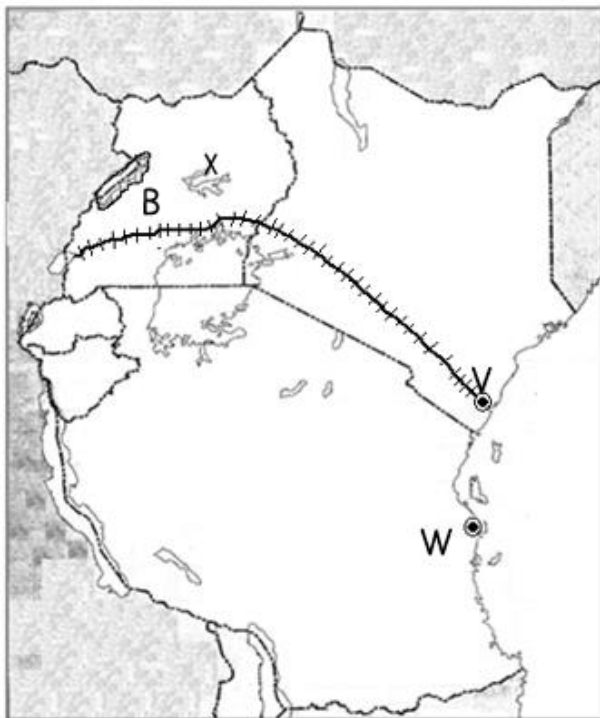
Or : What is Sin according to Islam?

40. Either : Name any one group of people in your Christian community who need special care.

Or : Name any one group of people in your Muslim community who need special care.

### **SECTION B: 60 MARKS**

41. Study the sketch map of East Africa below and use it to answer questions that follow.



a. Name the sea ports marked V and W.

V \_\_\_\_\_

W \_\_\_\_\_

b. Why was the railway built from port V to country X?

\_\_\_\_\_

\_\_\_\_\_

\_\_\_\_\_

c. Why is water transport difficult on lake marked X?

\_\_\_\_\_

\_\_\_\_\_

42. a. What is barter trade?

\_\_\_\_\_

\_\_\_\_\_

b. Give any one factor that made barter trade possible before the colonial rule.

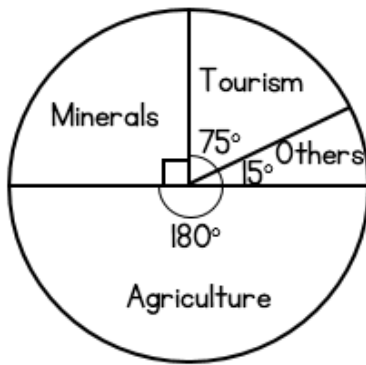
\_\_\_\_\_

c. State any two effects of local trade among different societies before the coming of colonial rule.

i. \_\_\_\_\_

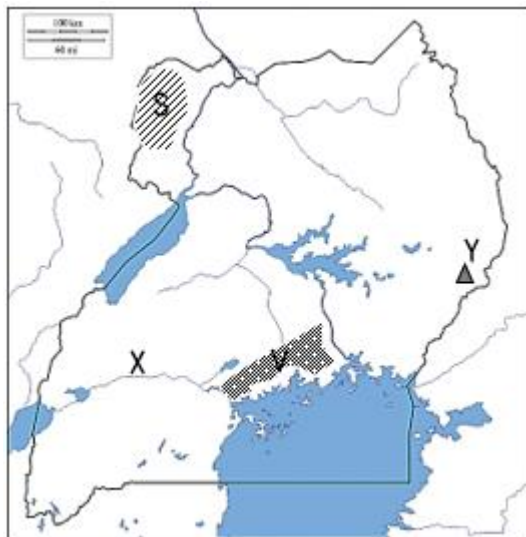
ii. \_\_\_\_\_

43. The pie-chart below shows a country's earnings. Use it to answer questions that follow.



- Which is the major export earner of this country?  
\_\_\_\_\_
- Name the second biggest export earner of this country.  
\_\_\_\_\_
- If the total earnings of this country is US dollars 240 million, find how much money was earned from tourism.  
\_\_\_\_\_

44. Study the sketch map of Uganda and use it to answer questions that follow.



- Name the river marked X.  
\_\_\_\_\_
- How was the mountain marked Y formed?  
\_\_\_\_\_
- Give the major cash crop grown in the area marked S.  
\_\_\_\_\_
- Why does Robusta coffee grow well in the area marked V?  
\_\_\_\_\_  
\_\_\_\_\_

45. a. Name the policy practiced in South Africa which separated the blacks from whites.  
\_\_\_\_\_

b. Name the first black president of South Africa who fought against the above mentioned policy.  
\_\_\_\_\_

c. State the two ways in which the policy mentioned above negatively affected blacks in South Africa.

- \_\_\_\_\_
- \_\_\_\_\_

46. a. Name the animal which is used for transport in desert areas.  
\_\_\_\_\_  
b. Mention any two factors which have enabled the animal you have named in (a) above to survive desert conditions.  
i. \_\_\_\_\_  
ii. \_\_\_\_\_  
c. State any one area that can support farming in the desert.  
\_\_\_\_\_
47. a. Name the source of solar energy.  
\_\_\_\_\_  
b. Name any two uses of solar energy.  
i. \_\_\_\_\_  
ii. \_\_\_\_\_  
c. Give any one advantage of using solar energy over hydro-electricity.  
\_\_\_\_\_
48. a. Name the type of farming where a farmer both grows crops and rears animals.  
\_\_\_\_\_  
b. State any two advantages of the above mentioned type of farming.  
i. \_\_\_\_\_  
ii. \_\_\_\_\_  
c. How do the crops benefit from the animals in the farm?  
\_\_\_\_\_
49. a. Name the place where the Nilotics first settled when they arrived in Uganda.  
\_\_\_\_\_  
b. State any two reasons why the Nilotics left their original homeland.  
i. \_\_\_\_\_  
ii. \_\_\_\_\_  
c. State any one positive effect of the migration of the Nilotics.  
\_\_\_\_\_
50. a. Apart from hospitals, mention any two other health service centres in your community.  
i. \_\_\_\_\_  
ii. \_\_\_\_\_  
b. Mention any two problems faced by the government in providing health services to the people.  
i. \_\_\_\_\_  
ii. \_\_\_\_\_

For each of the question 51 to 55, answer EITHER the Christian OR the Islamic question but not both. No marks will be awarded to a candidate who attempts both alternatives in a particular number.

51. Either:

a. What was the symbol of God's covenant with Noah?

\_\_\_\_\_

b. Mention the mountain Noah's Ark rested after the floods.

\_\_\_\_\_

c. Why did Noah curse his son Ham?

\_\_\_\_\_

d. What lesson do you learn from the story of Noah?

\_\_\_\_\_

Or:

a. What was the symbol of Allah's covenant with Prophet Nuhu?

\_\_\_\_\_

b. Mention the mountain where Prophet Nuhu's boat rested after the floods.

\_\_\_\_\_

c. Why did one of Prophet Nuhu's sons fail to enter the Ark?

\_\_\_\_\_

d. What lesson do you learn from the story of Prophet Nuhu?

\_\_\_\_\_

52. Either:

a. Name any two voluntary organisations that offer free services to the people.

i. \_\_\_\_\_

ii. \_\_\_\_\_

b. State any two ways in which the organisations you have named above help the people.

i. \_\_\_\_\_

ii. \_\_\_\_\_

Or:

a. Name two voluntary organisations that offer free services to the people.

i. \_\_\_\_\_

ii. \_\_\_\_\_

b. State any two ways in which the organisations you have named above help the people.

i. \_\_\_\_\_

ii. \_\_\_\_\_

53. Either:

a. Name any two persons that were raised from the dead by Jesus Christ.

i. \_\_\_\_\_

ii. \_\_\_\_\_

b. Mention any two things that helped Jesus Christ to keep His Father's Glory on earth.

i. \_\_\_\_\_

ii. \_\_\_\_\_

Or:

a. Name any two persons who suffered when they followed Prophet Muhammed (PBUH).

i. \_\_\_\_\_

ii. \_\_\_\_\_

b. Mention any two things that helped Prophet Muhammed (PBUH) to accomplish His work.

i. \_\_\_\_\_

ii. \_\_\_\_\_

54. Either:

a. According to the Christian teaching, what is the greatest commandment?

\_\_\_\_\_

b. Give any three ways in which some Christians go against the commandment mentioned in (a) above.

i. \_\_\_\_\_

ii. \_\_\_\_\_

iii. \_\_\_\_\_

Or:

a. According to the Islamic teaching, what is the greatest pillar?

\_\_\_\_\_

b. Give any three ways in which some Muslims go against the pillar you have mentioned in (a) above.

i. \_\_\_\_\_

ii. \_\_\_\_\_

iii. \_\_\_\_\_

55. Either: Match the days in list A with the events in list B correctly.

List A	List B
Ash Wednesday Holy Thursday Ascension day Pentecost day	<ul style="list-style-type: none"><li>• Jesus Christ ascended to Heaven.</li><li>• Christians begin fasting.</li><li>• Disciples received the Holy Spirit.</li><li>• Jesus Christ institutes the Holy Eucharist.</li></ul>

- a. Ash Wednesday \_\_\_\_\_
- b. Holy Thursday \_\_\_\_\_
- c. Ascension day \_\_\_\_\_
- d. Pentecost day \_\_\_\_\_

Or: Match the events in list A with those in list B correctly.

List A	List B
Eid al-Adha Eid al-Fitr Hijjah Hijrah	<ul style="list-style-type: none"><li>• Holy journey to Mecca.</li><li>• Prophet Muhammed's journey from Mecca to Medina</li><li>• Festival that marks the end of Ramadhan.</li><li>• Festival to remember Prophet Ibrahim's sacrifice to Allah.</li></ul>

- a. Eid al-Adha \_\_\_\_\_
- b. Eid al-Fitr \_\_\_\_\_
- c. Hijjah \_\_\_\_\_
- d. Hijrah \_\_\_\_\_